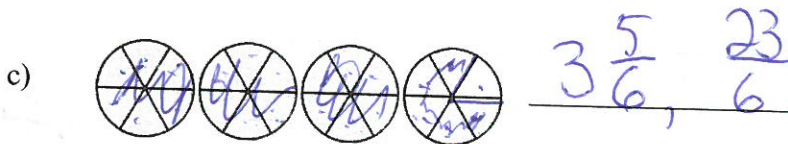
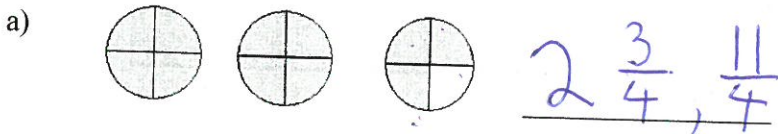


Name: Review

Fractions Test Review


Outcome: N6.7 Extend understanding of fractions to improper fractions and mixed numbers.

1. Write an improper fraction **and** a mixed number to describe each picture.



Level
1

2. Describe each picture as an improper fraction **and** as a mixed number.



7. Shade to represent $3\frac{1}{4}$



8. Write each time period as a mixed number **and** an improper fraction.

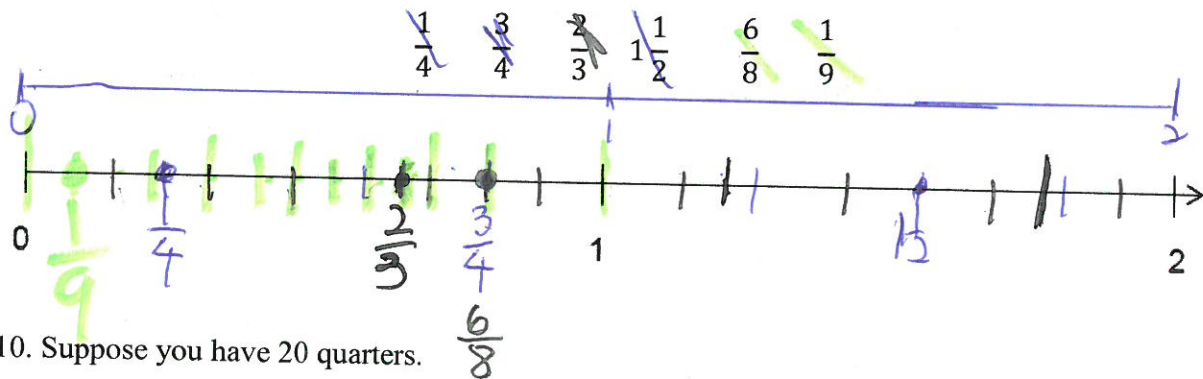
a) 4 h 15 min: $\frac{45}{60}, \frac{41}{4}$ h; $\frac{17}{4}$ h

b) 2 h 40 min: $\frac{23}{3}$ h; $\frac{8}{3}$ h

$\frac{240}{60}$

Level
3

9. Locate the positions of these fractions on the number line.



10. Suppose you have 20 quarters.

Do you have \$6? No

Show your work here.

\$E 4 quarters and ~~4x20~~ =